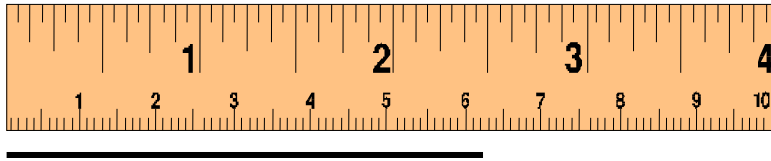
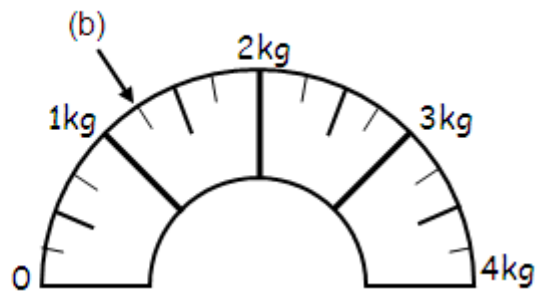
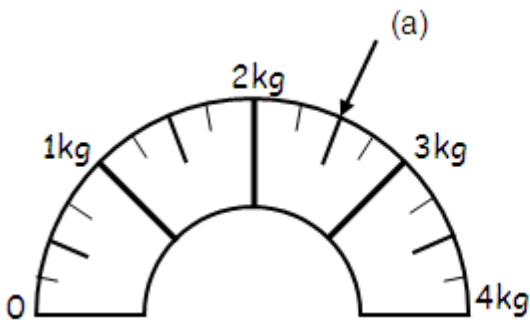


# N4 Applications of Maths – Reading Scales

1. Write down the length of this line in centimetres:



2. Write down the weight indicated on each of these scales:



3. What volume of liquid is in each of these tubes? (Give your answer in ml)

